

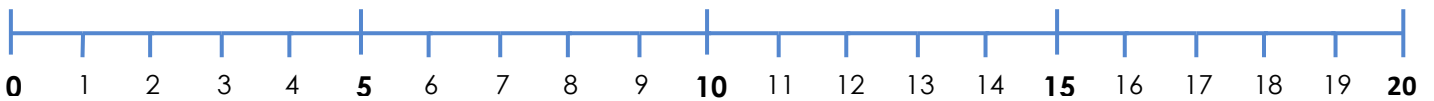
# Å telle videre

© www.undervisningsmetoder.com

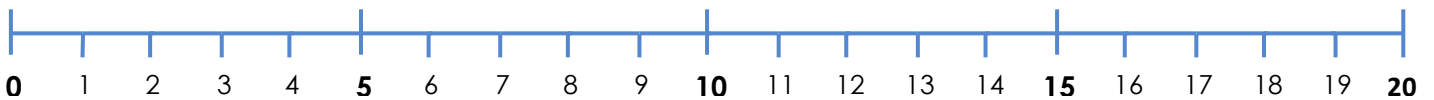
Navn: \_\_\_\_\_

Hvordan tenker du for å finne svaret?

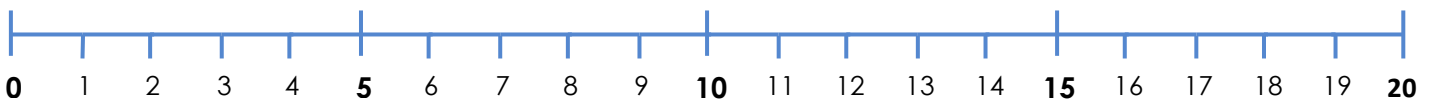
$$2 + 14 = \underline{\quad}$$



$$12 + 3 = \underline{\quad}$$



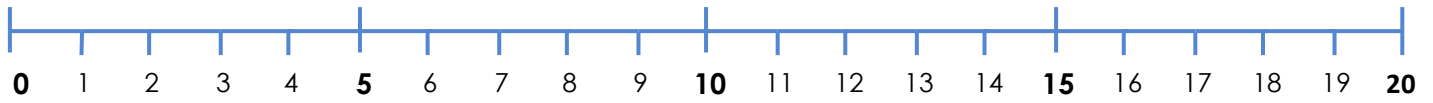

$$3 + 9 = \underline{\quad}$$



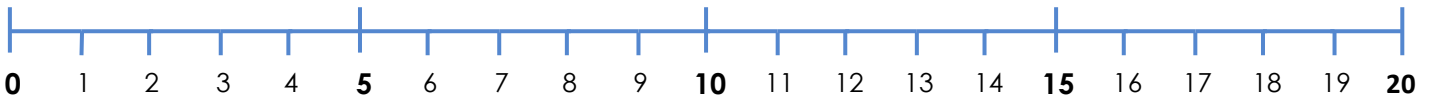
$$16 + 3 = \underline{\quad}$$



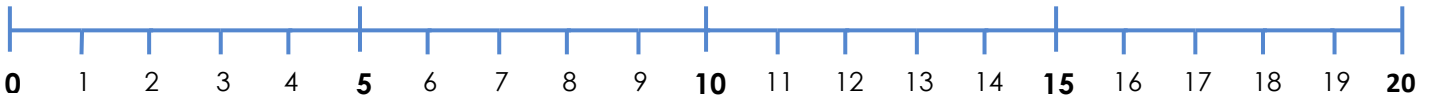
$2 + 11 = \underline{\quad}$



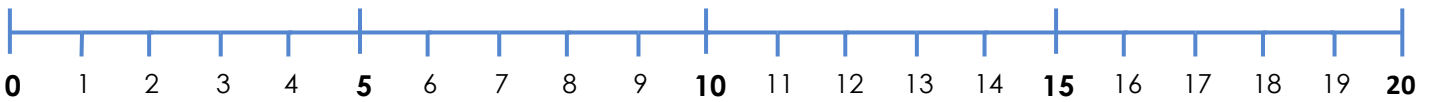
$7 + 2 = \underline{\quad}$



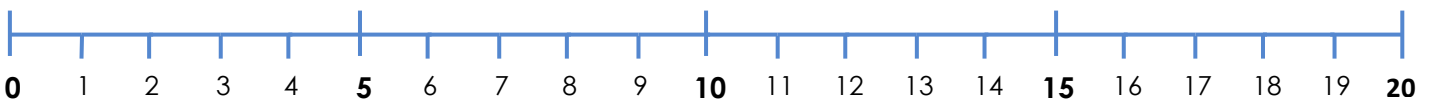
$3 + 17 = \underline{\quad}$



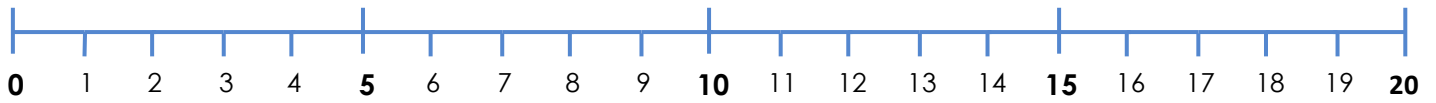
$7 + 3 = \underline{\quad}$



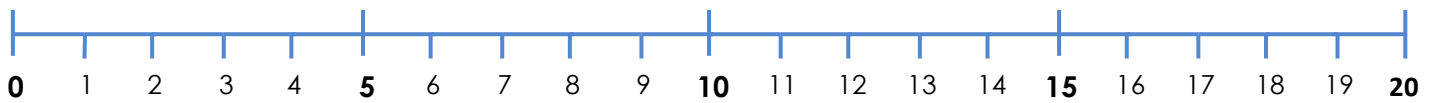
$2 + 9 = \underline{\quad}$



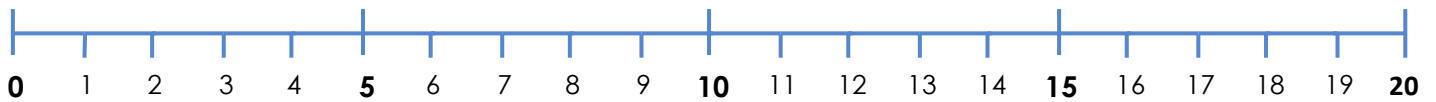
$3 + 15 = \underline{\quad}$



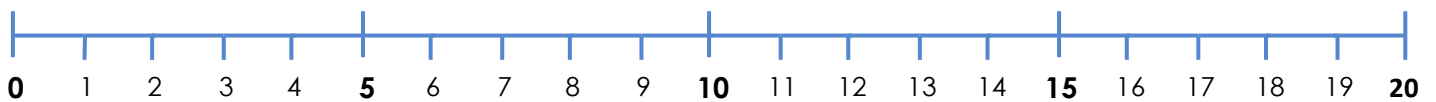
$2 + 18 = \underline{\quad}$



$3 + 13 = \underline{\quad}$



$8 + 4 = \underline{\quad}$



$4 + 9 = \underline{\quad}$

