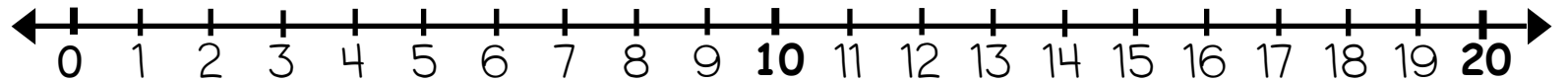
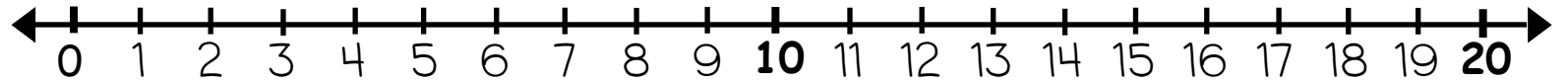


Vi lærer å finne forskjellen mellom to tal

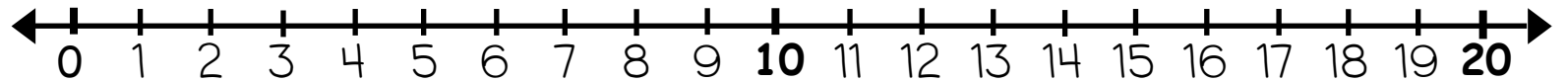
$$\square - \square = \boxed{3}$$



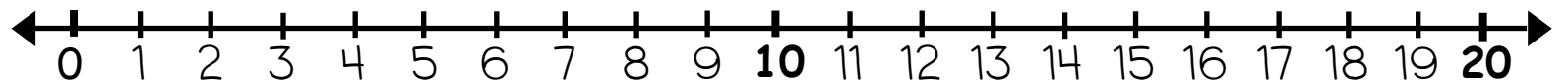
$$\square - \square = \boxed{1}$$



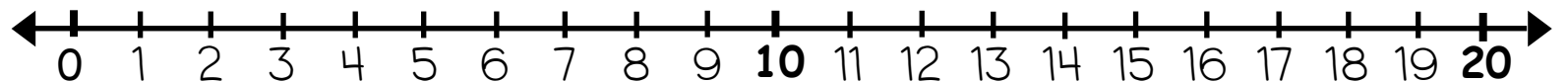
$$\square - \square = \boxed{3}$$



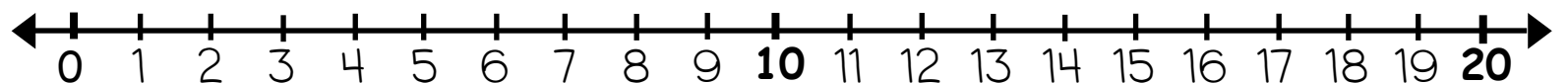
$$\square - \square = \boxed{4}$$



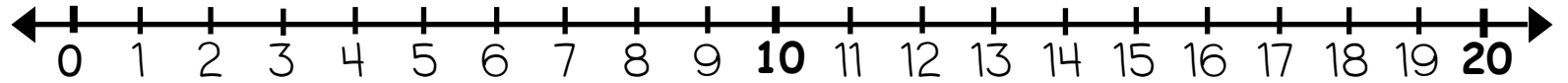
$$\square - \square = \boxed{2}$$



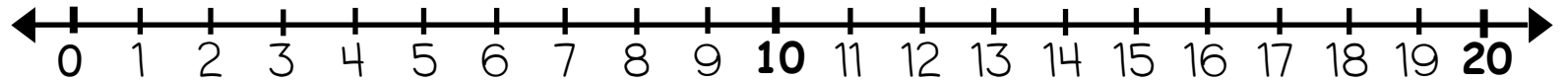
$$\square - \square = \boxed{5}$$



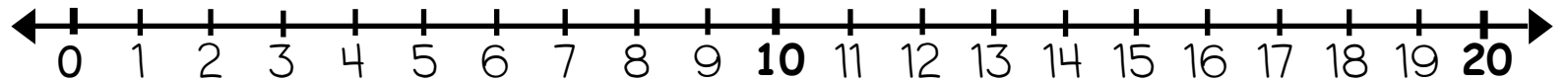
$$\square - \square = \boxed{6}$$



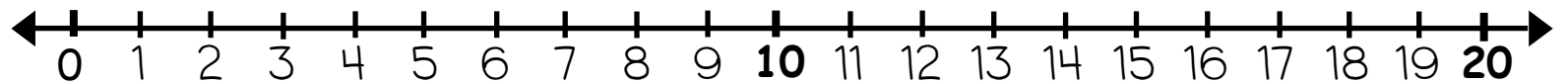
$$\square - \square = \boxed{3}$$



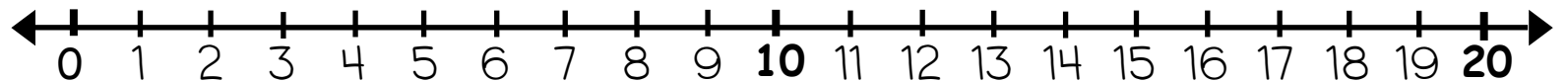
$$\square - \square = \boxed{2}$$



$$\square - \square = \boxed{5}$$



$$\boxed{9} - \boxed{6} = \square$$



$$\boxed{19} - \boxed{16} = \square$$

