

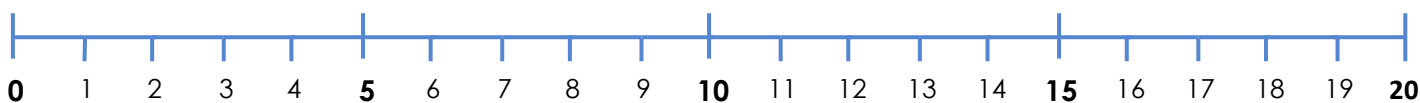
Å telje nedover

© www.undervisningsmetoder.com

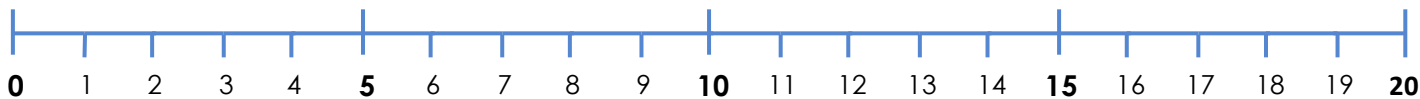
Namn: _____

Korleis tenkjer du for å finne svaret?

$4 - 3 = \underline{\quad}$



$14 - 3 = \underline{\quad}$



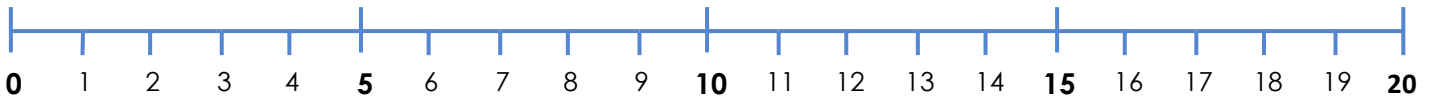
$9 - 5 = \underline{\quad}$



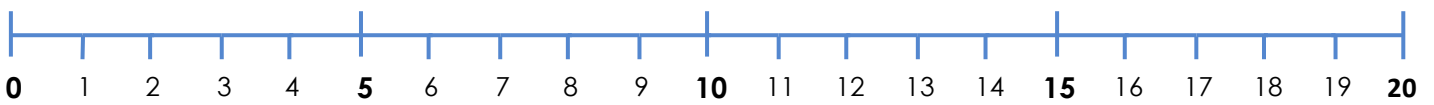
$19 - 5 = \underline{\quad}$



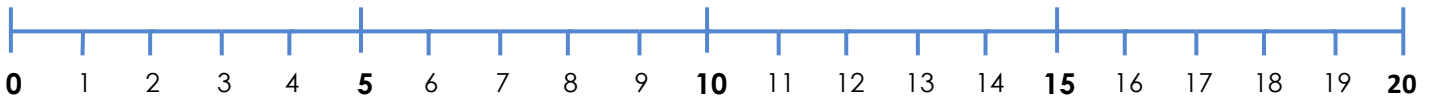
$10 - 3 = \underline{\quad}$



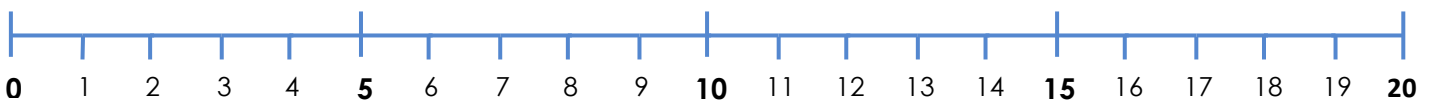
$20 - 3 = \underline{\quad}$



$20 - 4 = \underline{\quad}$



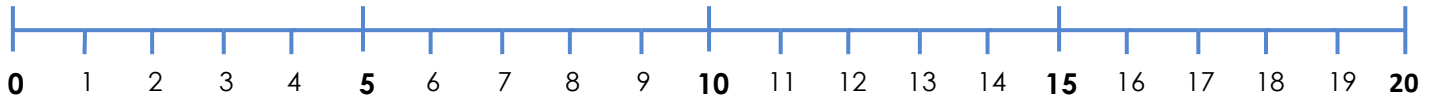
$10 - 5 = \underline{\quad}$



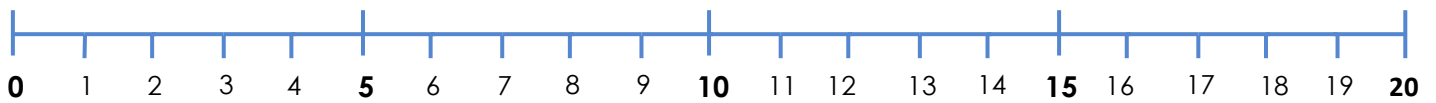
$20 - 5 = \underline{\quad}$



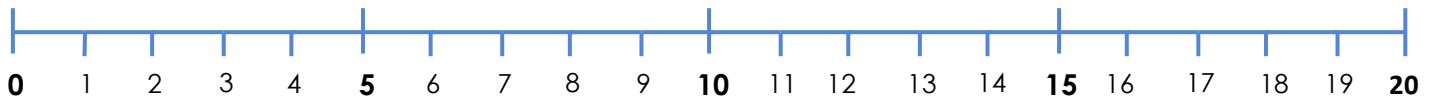
$12 - 2 = \underline{\quad}$



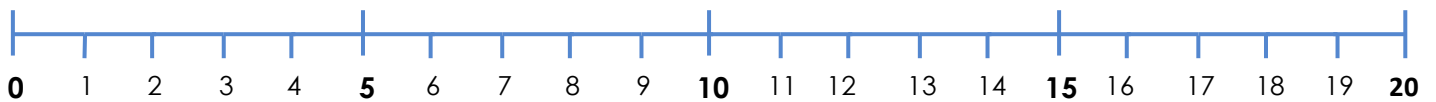
$15 - 5 = \underline{\quad}$



$13 - 3 = \underline{\quad}$



$14 - 4 = \underline{\quad}$



$11 - 1 = \underline{\quad}$



