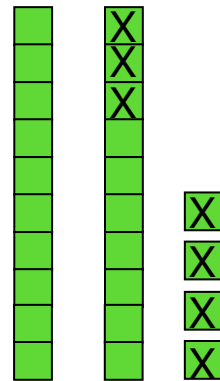


Regnetriks: REGNE OM TIEREN

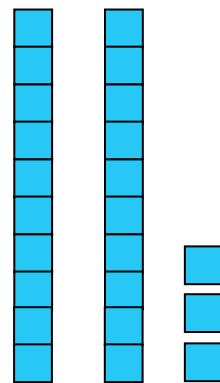
Bruk klosser for å vise hvordan du tenker.

Sett kryss over de klossene du tar bort. Regn ut.

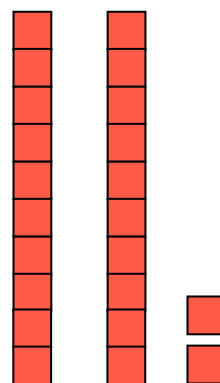
$$\begin{aligned} 24 - 7 &= \underline{24} - \underline{4} - \underline{3} \\ &= \underline{20} - \underline{2} \\ &= \underline{18} \end{aligned}$$



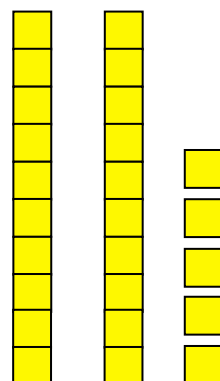
$$\begin{aligned} 23 - 5 &= \underline{\quad} - \underline{\quad} - \underline{\quad} \\ &= \underline{20} - \underline{\quad} \\ &= \underline{\quad} \end{aligned}$$



$$\begin{aligned} 22 - 6 &= \underline{\quad} - \underline{\quad} - \underline{\quad} \\ &= \underline{20} - \underline{\quad} \\ &= \underline{\quad} \end{aligned}$$



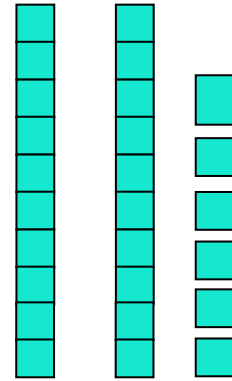
$$\begin{aligned} 25 - 7 &= \underline{\quad} - \underline{\quad} - \underline{\quad} \\ &= \underline{20} - \underline{\quad} \\ &= \underline{\quad} \end{aligned}$$



$$26 - 8 = \underline{\quad} - \underline{\quad} - \underline{\quad}$$

$$= \underline{20} - \underline{\quad}$$

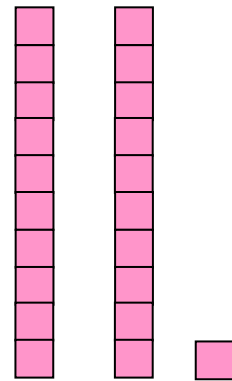
$$= \underline{\quad}$$



$$21 - 6 = \underline{\quad} - \underline{\quad} - \underline{\quad}$$

$$= \underline{20} - \underline{\quad}$$

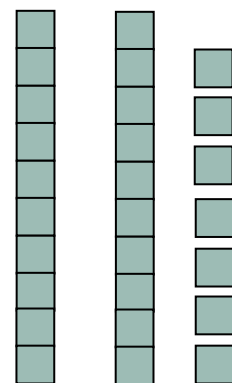
$$= \underline{\quad}$$



$$27 - 9 = \underline{\quad} - \underline{\quad} - \underline{\quad}$$

$$= \underline{\quad} - \underline{\quad}$$

$$= \underline{\quad}$$



$$24 - 8 = \underline{\quad} - \underline{\quad} - \underline{\quad}$$

$$= \underline{\quad} - \underline{\quad}$$

$$= \underline{\quad}$$

