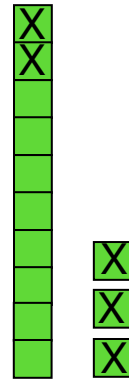


# Regnetriks: REGNE OM TIEREN

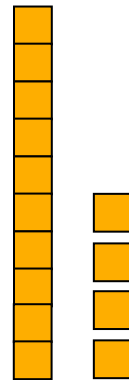
Bruk klosser for å vise hvordan du tenker.

Sett kryss over de klossene du tar bort. Regn ut.


$$\begin{aligned} 13 - 5 &= \underline{13} - \underline{3} - \underline{2} \\ &= \underline{10} - \underline{2} \\ &= \underline{8} \end{aligned}$$



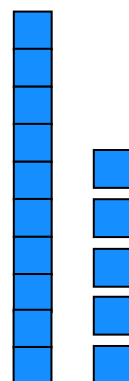
$$\begin{aligned} 14 - 5 &= \underline{\quad} - \underline{\quad} - \underline{\quad} \\ &= \underline{10} - \underline{\quad} \\ &= \underline{\quad} \end{aligned}$$



$$\begin{aligned} 12 - 6 &= \underline{\quad} - \underline{\quad} - \underline{\quad} \\ &= \underline{10} - \underline{\quad} \\ &= \underline{\quad} \end{aligned}$$



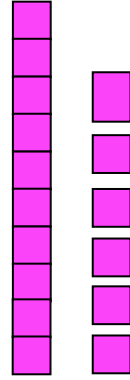
$$\begin{aligned} 15 - 7 &= \underline{\quad} - \underline{\quad} - \underline{\quad} \\ &= \underline{10} - \underline{\quad} \\ &= \underline{\quad} \end{aligned}$$



$$16 - 8 = \underline{\quad} - \underline{\quad} - \underline{\quad}$$

$$= \underline{10} - \underline{\quad}$$


$$= \underline{\quad}$$



$$13 - 6 = \underline{\quad} - \underline{\quad} - \underline{\quad}$$

$$= \underline{10} - \underline{\quad}$$

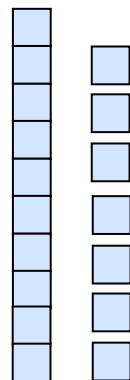
$$= \underline{\quad}$$



$$17 - 9 = \underline{\quad} - \underline{\quad} - \underline{\quad}$$

$$= \underline{10} - \underline{\quad}$$

$$= \underline{\quad}$$



$$15 - 8 = \underline{\quad} - \underline{\quad} - \underline{\quad}$$

$$= \underline{10} - \underline{\quad}$$

$$= \underline{\quad}$$

